



සිරිධම්ම විද්‍යාලය
SIRIDHAMMA COLLEGE

GRADE 7 - FIRST TERM EVALUATION, ASSIGNMENT 1, 2020

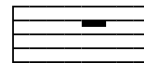
WESTERN MUSIC

Underline the most suitable answer

1) Which of the following would equal 4 Crotchet?

- a) Minim b) Crotchet c) Semibreve d) Brave

2) Which of these is a quaver rest?



3) Which of these is a semitone?




4) Name the following Instruments




02) Write the following scales and mark semitones with slurs.

a) C major ascending , using treble clef. In quavers (3)



b) C major descending , using bass clef.in Crotchets (3)



03) Add the time signatures to the given melodies (4)



b) Write the time signatures which mean,(4)

1) 2 Crotchet beats in a bar –

2) 4 Quaver beats in a bar -

4) Write a **rest Double the value** of the given note.(3)

